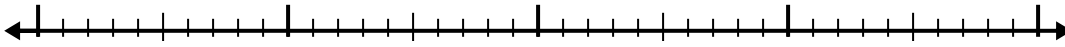




Use the number line to solve each problem.

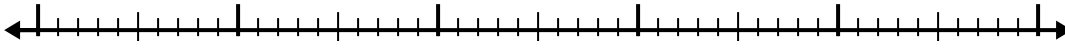
Answers

1) $1.7 + 2.1 =$



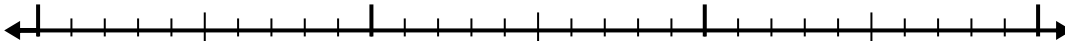
1. _____

2) $8.1 + 2.5 =$



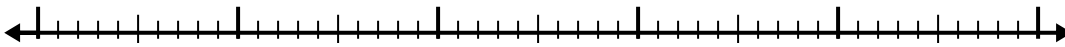
2. _____

3) $2 + 1.1 =$



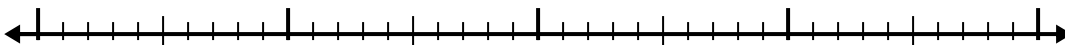
3. _____

4) $5.6 + 3.1 =$



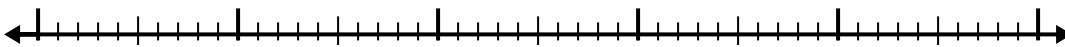
4. _____

5) $8.7 + 2.5 =$



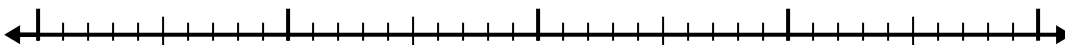
5. _____

6) $3.9 + 2.7 =$



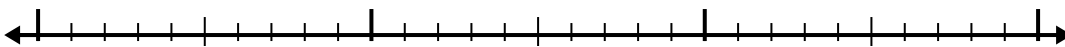
6. _____

7) $3.3 + 1.4 =$




7. _____

8) $2.2 + 1.4 =$



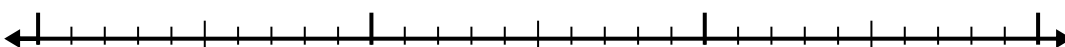
8. _____

9) $4.7 + 1.8 =$



9. _____

10) $6.5 + 1.7 =$

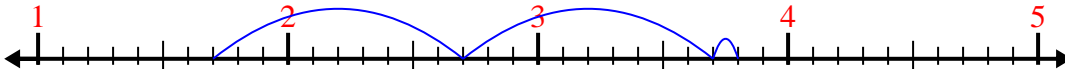


10. _____

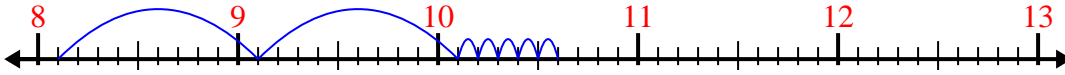


Use the number line to solve each problem.

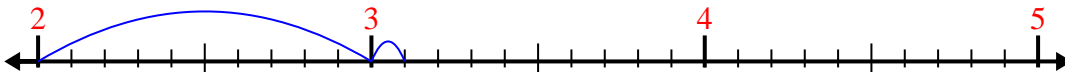
1) $1.7 + 2.1 =$



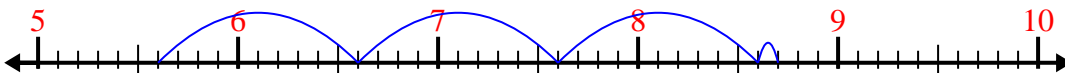
2) $8.1 + 2.5 =$



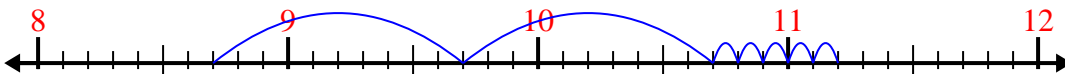
3) $2 + 1.1 =$



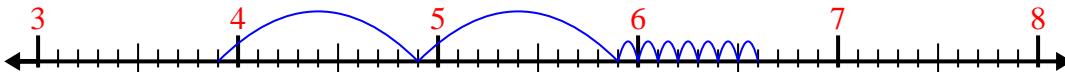
4) $5.6 + 3.1 =$



5) $8.7 + 2.5 =$



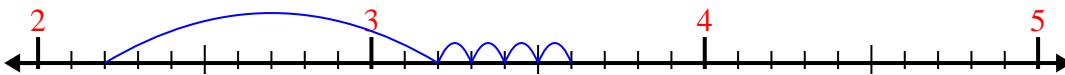
6) $3.9 + 2.7 =$




7) $3.3 + 1.4 =$




8) $2.2 + 1.4 =$



9) $4.7 + 1.8 =$



10) $6.5 + 1.7 =$



Answers

1. 3.8

2. 10.6

3. 3.1

4. 8.7

5. 11.2

6. 6.6

7. 4.7

8. 3.6

9. 6.5

10. 8.2